

Volume


Chapter 7

Name: _____ Class: _____ Date: _____

Worksheet 1

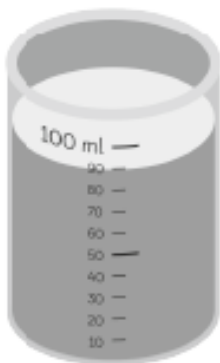
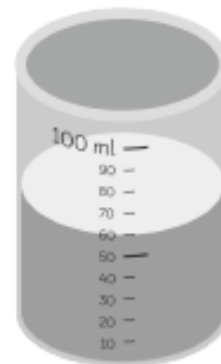
Measuring Volume in Millilitres

Find the volume of water in each beaker.



- (a) The volume of water in the beaker is about millilitres.

- (b) The volume of water in the beaker is about millilitres.



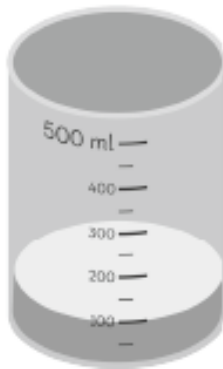
- (c) The volume of water in the beaker is about millilitres.

Name: _____ Class: _____ Date: _____

Worksheet 2

Measuring Capacity in Millilitres

Find the volume of water in each beaker.

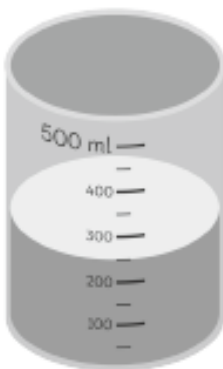
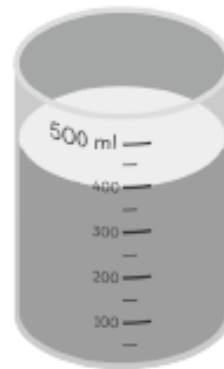


(a) The volume of water in the beaker is about

millilitres.

(b) The volume of water in the beaker is about

millilitres.



(c) The volume of water in the beaker is about

millilitres.