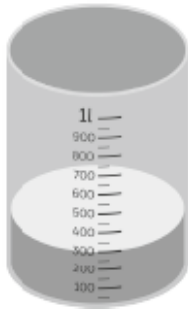


Name: _____ Class: _____ Date: _____

Worksheet 3

Measuring Volume in Millilitres and Litres

Find the volume of water in each beaker.




(a) The volume of water in the beaker is about

ml.

(b) The volume of water in the beaker is about

ml.



(c) The volume of water in the beaker is about

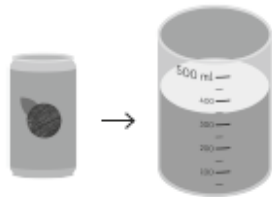
ml.

Name: _____ Class: _____ Date: _____

Worksheet 4

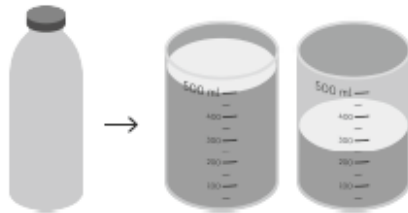
Measuring Capacity in Millilitres and Litres

- 1** Find the capacity of each container.
(a)



ml

(b)




ml

(c)



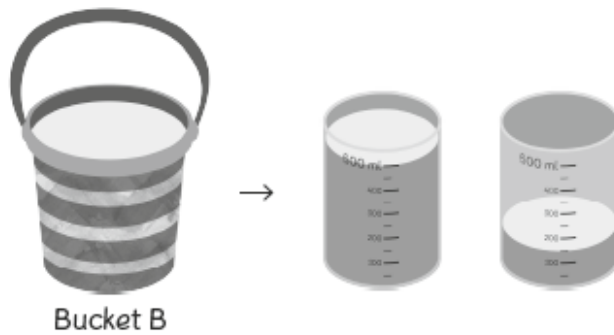
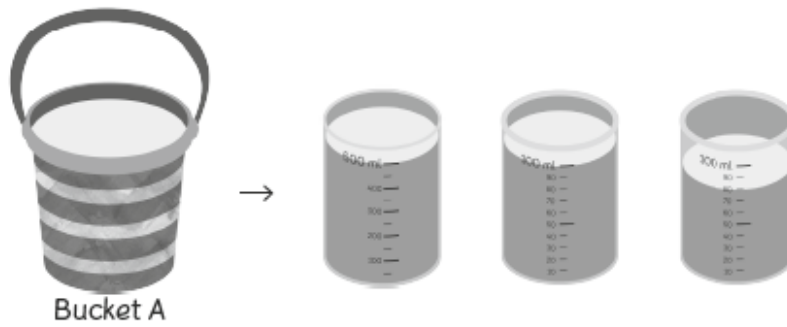
ml

(d)



ml

2 Fill in the blanks.



- (a) Bucket has a greater capacity.
- (b) Bucket has a smaller capacity.
- (c) The capacity of Bucket A is about ml, while the capacity of Bucket B is about ml.
- (d) The capacity of Bucket B is ml (more/less) than Bucket A.