


Name: _____ Class: _____ Date: _____

Worksheet 5

Writing Volume in Litres and Millilitres

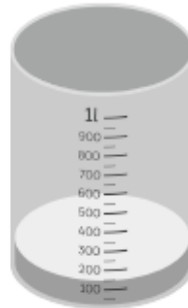
1 Find the volume of water needed to make 1 L.

(a)



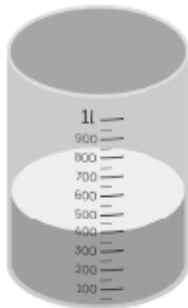
ml is needed.

(b)



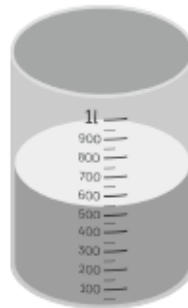
ml is needed.

(c)



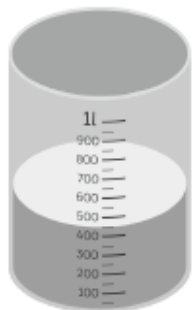

ml is needed.

(d)



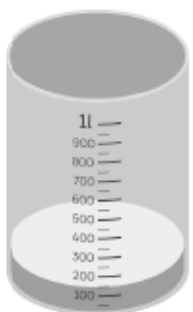
ml is needed.

2 What is the total volume of water in the two beakers?




ml

3 How much more water is needed to make 700 ml?



ml

4 How much water remains in the beaker after 420 ml of water is poured out?



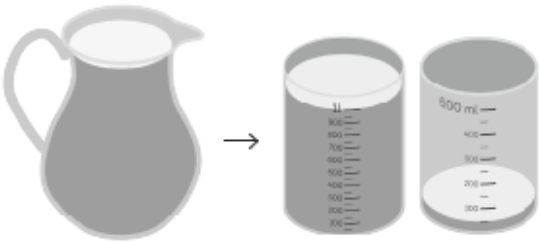
ml

Name: _____ Class: _____ Date: _____


Worksheet 6

Writing Capacity in Litres and Millilitres

Find the capacity of each container.

(a)  l ml

(b)  l ml

(c)  l ml