

Maths Task – 18.6.20

MNP Workbook: **3B**

Chapter 9: **Time**

Lesson 6: **Telling the Time** (page 41)

Skill: I can tell and write the time from 12-hour and 24-hour clocks.

Well done on all of your work telling the time so far this week. This can be quite a tricky topic, make sure you click on lots of the links I have provided to help support your learning. Today we will focus on telling the time from both a 12 hour and 24 hour clock.



DEPARTURES			TERMINAL 1	
Time	Destination	Flight		
19:30	AMSTERDAM	R4 4950		
19:30	MOSCOW	EB 7413		
19:45	LISBON	DN 0504		
19:40	MANCHESTER	OD 7815		
19:50	STOCKHOLM	NP 6089		
20:05	FRANKFURT	UC 1720		
20:10	MILAN	EB 3643		
20:20	LONDON	R4 4158		
20:45	ROME	NP 1697		



Click [HERE](#) to recap on 12 hour and 24 hour clocks.


In Focus

✈ Departures				
Time	Flight	Destination	Gate	Status
12:20	CA 9234	Sydney	06	Departed
13:00	EZ 67	Sydney	10	Gate closed
13:25	AL 089	Perth	09	Final call
13:40	BA 2909	Hong Kong	11	Boarding now
14:50	SA 100	Bangkok	08	
15:45	VA 4017	Melbourne	01	
17:20	EZ 081	Brisbane	15	


What time is it now?
 What time is the flight to Bangkok?

Let's Learn

1 What time is it now?

 11 o'clock
in the morning 11:00

 12 o'clock
at noon 12:00

 1 o'clock
in the afternoon 13:00



13:00 is
1 o'clock in the
afternoon.

2 What time is the flight to Bangkok? 14:50

 2 o'clock
in the afternoon 14:00

14:50 is 2:50 p.m.
 The flight to Bangkok is at 2:50 p.m.

The flight is at
10 minutes to 3
in the afternoon.

3 What is the boarding time?

FlyAirlines		Boarding Pass		
Travel Date	23 Jan	From	London Heathrow	
Flight Number	LQ 321	To	Singapore	
Boarding Time	10 15	Passenger	Sam Barrow	
		Seat	26a	67FR S26B
Gates close 15 minutes before departure				



It is at
10:15 a.m.

It is at 15 minutes past 10 in the morning.

SkyAirlines		Boarding Pass		
Travel Date	23 Jan	From	London Heathrow	
Flight Number	SA 456	To	New York	
Boarding Time	16 55	Passenger	Hannah Rogers	
		Seat	12b	67FR S26B
Gates close 15 minutes before departure				




It is at
4:55 p.m.

It is at 5 minutes to 5 in the afternoon.

Complete the Guided Practice below.

Guided Practice

	Tell the time shown.	Write it.	Say it.
1		8:20 a.m.	20 minutes past 8 in the morning
2		<input type="text"/>	<input type="text"/> minutes to <input type="text"/> in the <input type="text"/>
3		<input type="text"/>	<input type="text"/> in the <input type="text"/>
4		<input type="text"/>	<input type="text"/> minutes past <input type="text"/> in the <input type="text"/>
5		<input type="text"/>	<input type="text"/> minutes past <input type="text"/> in the <input type="text"/>
6		<input type="text"/>	<input type="text"/> minute to <input type="text"/>

Now you have warmed up, you are ready to complete your Maths No Problem worksheets.



Complete Maths No Problem worksheet 6 (page 41). If you have already completed these worksheets, [click here](#) for blank MNP worksheets. Once you have completed, ask an adult to help check your answers using the MNP website.

Support

If you are finding these worksheets tricky, [click HERE](#) for some help!

If you need to ask a question, post it on the blog and I can help.

Consolidation

Click [HERE](#) for White Rose Maths to complete some more questions on 12 hour and 24 hour clocks.

Click [HERE](#) for some time games.