

Maths Task – 19.6.20

MNP Workbook: **3B**

Chapter 9: **Time**


Lesson 7: **Telling the Time** (page 42)

Skill: I can tell the time on an analogue clock using Roman numerals.

Well done with your work on 12 and 24 hour clocks yesterday. Telling the time from a 24 hour clock can be tricky, so please don't worry if you found it difficult ☺

Today we will recap on reading a clock using Roman numerals.

Roman numerals	
1 = I	9 = IX
2 = II	10 = X
3 = III	11 = XI
4 = IV	12 = XII
5 = V	13 = XIII
6 = VI	20 = XX
7 = VII	30 = XXX
8 = VIII	



When we read a clock with Roman numerals, the times are read and written in the same way.

In Focus



What time is it now?

IV is often shown as IIII on clocks.



Let's Learn

1 What time is it now?

It is 4 o'clock in the afternoon.
We write it as 4:00 p.m.



The time is 16:00.



2



It is half past 7 in the morning.
We write it as 7:30 a.m.



3



It is 15 minutes to 1 in the afternoon.
We write it as 12:45 p.m.



It is past noon.



4



It is 5 minutes to midnight.
We write it as 11:55 p.m.






It is almost midnight.









Complete the Guided Practice below.




Guided Practice

Tell the time.

(a)   

(b)   

(c)   

(d)   

Now you have warmed up, you are ready to complete your Maths No Problem worksheets.

MATHS
NO PROBLEM! 

Complete Maths No Problem worksheet 7 (page 42). If you have already completed these worksheets, click [here](#) for blank MNP worksheets. Once you have completed, ask an adult to help check your answers using the MNP website.

Support

If you are finding these worksheets tricky, click [HERE](#) for some help!

<https://www.bbc.co.uk/bitesize/topics/z7c9q6f/articles/z48447h>

If you need to ask a question, post it on the blog and I can help.

Consolidation

Click [HERE](#) for White Rose Maths to complete some more questions on 12 hour and 24 hour clocks.

Click [HERE](#) for some time challenges.