

Further Multiplication and Division

Chapter 4

Name: _____ Class: _____ Date: _____


Worksheet 1

Multiplying 2-Digit Numbers

1 Multiply.


(a) $2 \times 3 =$

$2 \times 30 =$



(b) $5 \times 4 =$

$5 \times 40 =$




(c) $6 \times 8 =$

$60 \times 8 =$



(d) $9 \times 3 =$

$90 \times 3 =$



2 Multiply and fill in the blanks.

(a) $4 \times 30 = \square$

$4 \times 50 = \square$

$4 \times 70 = \square$

$4 \times 80 = \square$

$4 \times 100 = \square$

(b) $8 \times 20 = \square$

$8 \times 40 = \square$

$8 \times 60 = \square$

$8 \times 80 = \square$

$8 \times 90 = \square$

(c) $30 \times 3 = \square$

$30 \times 5 = \square$

$30 \times 7 = \square$

$30 \times 8 = \square$

$30 \times 10 = \square$

(d) $40 \times 3 = \square$

$40 \times 4 = \square$

$40 \times 6 = \square$

$40 \times 7 = \square$


$40 \times 9 = \square$


Name: _____ Class: _____ Date: _____


Worksheet 2


Multiplying 2-Digit Numbers

1 Fill in the blanks.

(a)  $12 \times 3 = 12 + 12 + 12 = \square$

(b) 
 $16 \times 2 = \square + \square = \square$

(c) 
 $21 \times 4 = \square + \square + \square + \square = \square$

(d) 
 $35 \times 4 = \square + \square + \square + \square = \square$

2 Fill in the blanks.

(a) $15 \times 3 = \square$



5 ones \times 3 = \square

1 ten \times 3 = \square

$\square + \square = \square$

(b) $26 \times 8 = \square$



6 ones \times 8 = \square

2 tens \times 8 = \square

$\square + \square = \square$

(c) $32 \times 4 = 2 \times 4 + 30 \times 4 = \square$

(d) $56 \times 3 = \square \times 3 + \square \times 3 = \square$

(e) $8 \times 24 = 8 \times \square + 8 \times \square = \square$

(f) $48 \times 8 = \square \times 8 + \square \times 8 = \square$