

Can I tell the time to the nearest 5 minutes and draw the time to the nearest 5 minutes?


Write the times shown below with numbers and by writing the number of minutes past the hour.



2:15 or  
15 minutes after  
2 o'clock



\_\_\_\_\_ or  
\_\_\_\_\_ minutes after  
\_\_\_\_\_ o'clock



\_\_\_\_\_ or  
\_\_\_\_\_ minutes after  
\_\_\_\_\_ o'clock




\_\_\_\_\_ or  
\_\_\_\_\_ minutes after  
\_\_\_\_\_ o'clock



\_\_\_\_\_ or  
\_\_\_\_\_ minutes after  
\_\_\_\_\_ o'clock



\_\_\_\_\_ or  
\_\_\_\_\_ minutes after  
\_\_\_\_\_ o'clock



\_\_\_\_\_ or  
\_\_\_\_\_ minutes after  
\_\_\_\_\_ o'clock

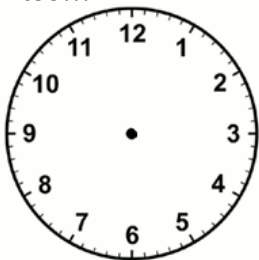


\_\_\_\_\_ or  
\_\_\_\_\_ minutes after  
\_\_\_\_\_ o'clock

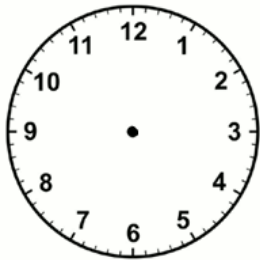


\_\_\_\_\_ or  
\_\_\_\_\_ minutes after  
\_\_\_\_\_ o'clock


Can you draw the times on these clocks? Be careful with the hour hand – remember that it moves too!!!



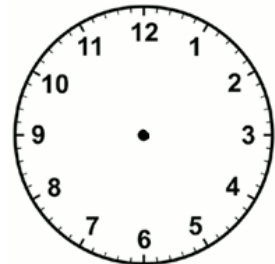
7:20



2:35



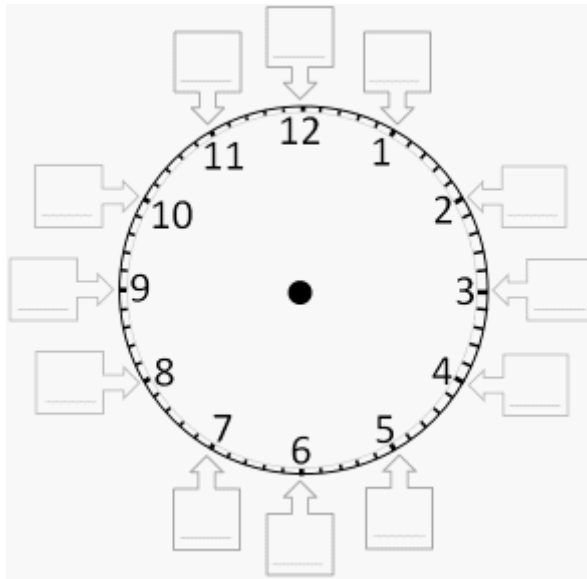
10:05



6:55

Can I count in 5s around the clock then use this to tell the time to the nearest 5 minutes?

Count around the clock by fives starting with 0 above the 12 hour number.



Write the times shown below with numbers and by writing the number of minutes past the hour.



2:15




\_\_\_\_\_



\_\_\_\_\_




\_\_\_\_\_




\_\_\_\_\_



\_\_\_\_\_



\_\_\_\_\_



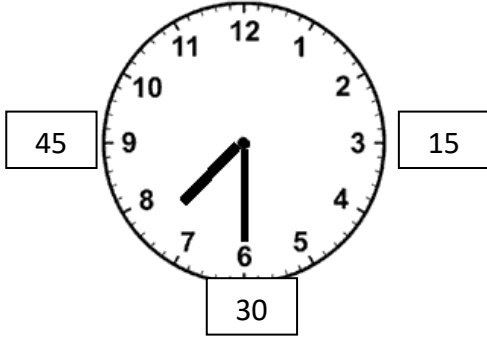
\_\_\_\_\_



\_\_\_\_\_

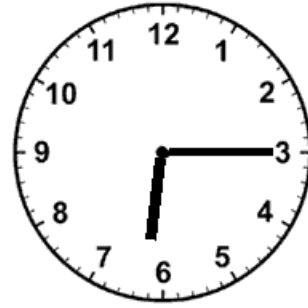
Can I tell the time to the hour, half and quarter hour?

00



Time is: 7:30

In words: Half past 7.



Time is: \_\_\_\_\_

In words: \_\_\_\_\_



Time is: \_\_\_\_\_

In words: \_\_\_\_\_



Time is: \_\_\_\_\_

In words: \_\_\_\_\_




Time is: \_\_\_\_\_

In words: \_\_\_\_\_



Time is: \_\_\_\_\_

In words: \_\_\_\_\_



Time is: \_\_\_\_\_

In words: \_\_\_\_\_



Time is: \_\_\_\_\_

In words: \_\_\_\_\_